

INTERNATIONAL INDIAN SCHOOL - DAMMAM
UPPER PRIMARY SECTION (2018-19)
CLASS III – EVS WORKSHEET (TERM-I)

L-7 OUR FOOD

I. Fill in the blanks

1. We cannot live without _____.
2. Food gives us _____ to work and play.
3. Food helps us to _____ and stay _____.
4. Most of the food we eat comes from _____ and _____.
5. _____ and _____ are prepared from wheat.
6. Food divided into three different groups such as _____,
_____ and _____.
7. _____ is said to be a complete food.

II. Write true or false. If false correct the statements .

1. We eat fruits of some plants like spinach and cabbage .

2. Idli is prepared from rice.

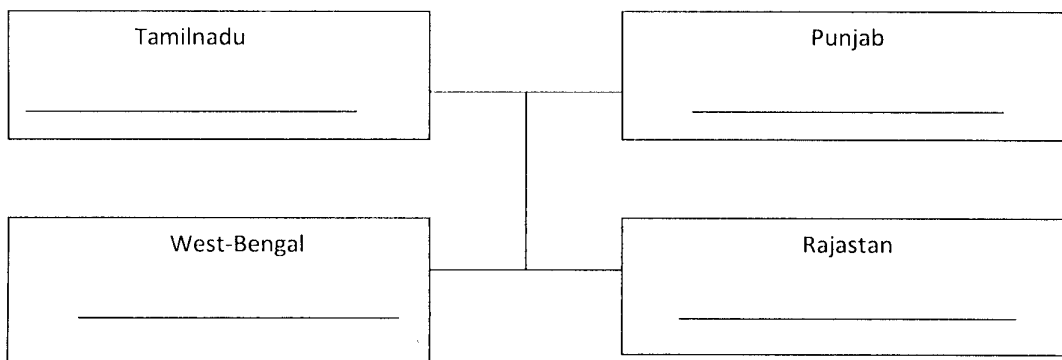
III. Tell me 'why'

1. When a baby is three months old, it needs to eat cereals. Why ?

2. People who live in coastal areas eat fish. Why ?

IV. Fill in the blanks by choosing correct answers from the bracket

(Makki-ki -roti , Rice , Dal-bati , Dosa)



L-8 COOKING


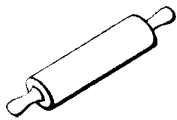
I. Fill in the Blanks

1. Cooking kills _____ in the food which cause diseases.
2. Earlier utensils were made of _____, _____ or _____
3. _____ helps to cook faster and uses less fuel.

II. Name the following


1. Food eaten by raw as well as cooked _____, _____
2. Food cooked by baking _____, _____
3. Food cooked by frying _____, _____
4. Fuels used to cook in olden times _____, _____

III. Write the name of utensils




IV. Put color for the following

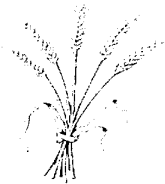
Eaten raw and cooked in Green and only cooked in red



Onion



Brinjal



Wheat



Lady's finger



Pulses



Carrot



Watermelon



Potato

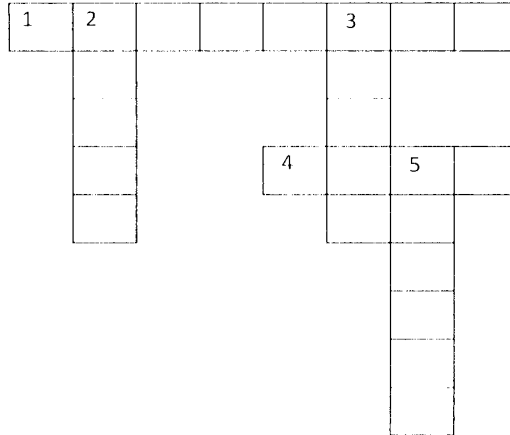
V. Solve the puzzle

Across

1. Idli is cooked by _____
4. _____ is cooked by boiling.

Down

2. Cooking makes the food _____
3. _____ has the largest number of wheat eaters in the world.
5. _____ was used to cook food.



L-9-USES OF WATER

Fill in the blanks:

1. _____ is the main source of water.
2. Water is taken out from the ground with the help of _____ and _____.
3. One of the most important ways of conserving water is _____.
4. _____ dissolves nutrients of the soil and carries these nutrients to different parts of the plant.
5. _____ and _____ are two rivers of India.

Write True or False . Correct the false statement.

1. Water from rivers and tanks is fit for drinking. ()

2. Rainwater gets collected in rivers, lakes, ponds, tanks and wells. ()

3. Recycling water is another way by which water can be conserved. ()

4. To save water, we should use shower to bath. ()

5. Water helps us to eliminate waste matter from our body. ()

Give reasons:

1. Water has to be conserved because

2. Plants need water to grow as

Identify the pictures:



L- 11.MEANS OF COMMUNICATION

1. Fill in the blanks:

1. _____ office helps us in sending our telegrams.
2. Telephone was invented by _____
3. To make direct calls to other countries we use _____
4. _____ is sent through a computer.
5. Mobile phones can be used _____ and _____
6. The means of _____ communication include radio, television, newspaper and magazines.
7. _____, _____, _____ etc. are some of the other means of communication.

2. Write True and False If false correct the statements:

1. An Aerogramme is used to send the urgent messages ().

2. Telegram can be written on a paper ()

3. With the help of telephone we can talk to our friends and relatives by sitting at home ()

4. The telephone system links most of the towns and villages in our country ()

5. We can make direct calls to other countries through STD ()

3. Write a brief note on global village.

.....
.....
.....

4. Give reason:

1. Why is it important to write **PIN CODE** with address on a letter?

.....
.....
.....

2. Soap companies use TV for their advertisement

.....
.....
.....

3. Rahul called his friend Sonu on his mobile phone to inform him about his mother's accident

.....
.....

Lesson 13 – The World of Plants

I. Choose the correct answer

1. The part of the plants above the ground level is called _____
(a. Root b. shoot c. climbers)
2. Trees shed their leaves in _____
(a. autumn b. winter c. summer)
3. Plants that have weak stems and grow around some support are called _____
(a. climbers b. creepers c. trees)
4. _____ leaves are used to color hands and feet
(a. mint b. tulsi c. Mehndi)
5. Tulsi is a _____
(a. herb b. shrub c. climber)

II. Match the following

- | | |
|-----------------|-------------|
| 1) Pumpkin | a) Herbs |
| 2) Banyan | b) Shrub |
| 3) Tulsi | c) Climbers |
| 4) Bitter gourd | d) Creepers |
| 5) Hibiscus | e) Trees |

III. Give Reasons

1. Plants are green in colour because _____
.....
2. Climbers grow around some support because _____
.....
.....

IV. Give 2 differences between Herbs & Shrubs

Herbs	Shrubs

V. Fill in the blanks

- _____ holds the plants firmly in the soil
- Rose and Jasmine plants are used for making _____
- Grapevine is a _____
- Roots suck in _____ and _____ from the earth
- Tall and strong plants are called _____
- Chlorophyll together with _____, _____ and _____ makes food for the plants

VI. True and False

- Plants with weak stems, which grow around some support are called creepers ()

- Trees have thick and strong trucks ()

- Mint leaves are used to make chutney ()

- Rose is a herb ()

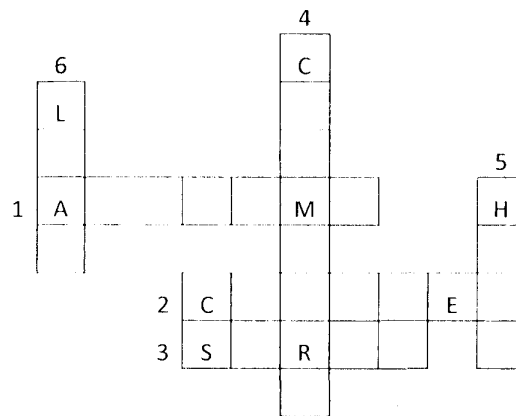
VII. Complete the grid with the help of the clues given below

Across

- Trees shed their leaves in _____
- Pumpkin is a _____
- Rose is a _____

Down

- Plants that have weak stem & grow around some support _____
- Mint is a _____
- Food factories for plants _____



VIII. Write 1 example of each

1. Plant that has thin, hard and wood stem _____
2. A plant that is used for making medicines _____
3. Leaf used as a plate _____
4. Leaf used to make palm red _____

UNIT 14 NATURAL RESOURCES, L-20 NATURES GIFT

I. Fill in the blanks

1. _____ is the uppermost layer of the Earth's crust.
2. Loam contains _____ and _____.
3. Soil provides _____ and _____ to plants.
4. _____ treat sick or injured animals.
5. Air gets polluted by _____ from factories.

II. Name the following

1. Things given to us by nature _____
2. Bottom layer of soil made of solid rock _____
3. The pollution caused by loud speakers _____
4. Dead remains of plants and animals _____
5. The soil that does not hold water _____

III. Match the following

1. Cattle bathing natural resources ()
2. Soil air pollution ()
3. Wild animals minerals ()
4. Manures and fertilizers water pollution ()
5. smoke wildlife sanctuaries ()

IV. Give reasons

1. Farmers add manures and fertilizers to the soil because _____

2. Loam is the best soil for growing crops because _____

3. Soil is very useful because _____

V. State true or false , if false correct the statement

1. Air becomes fresh by the trees ()

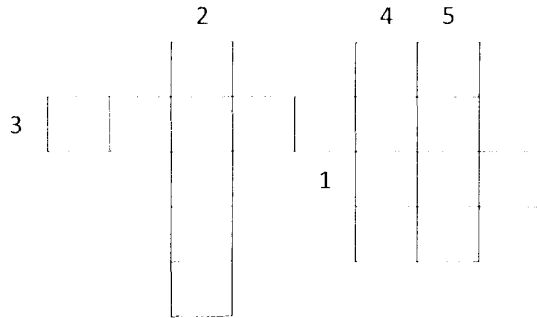
2. Soil is formed by the breaking up of sand.()

3. Sand mixed with cement is used for making buildings.()

4. Smoke from factories and vehicles cause noise pollution ()

VI. Fill in the blanks and complete the following crossword with the help of given clues.

1. Living things cannot live without _____
2. The _____ is the only planet to have water.
3. _____ is a kind of soil which does not hold water.
4. _____ is used for making pots and toys.
5. Plants need _____ to grow.



VII. Answer the following

1. How can we make the Earth more green and clean?

.....

.....

.....

.....

DRAWING

Draw soil profile

Draw any two utensils

Draw and label parts of a plant

Draw a post card

Draw two body building food, two energy giving food and two protective food

LEARN ALL THE NOTES GIVEN IN THE NOTE BOOK

READ THE TEXT BOOK THOROUGHLY