

INTERNATIONAL INDIAN SCHOOL, DAMMAM

CLASS – 1

MATHS WORKSHEET NO – 1

Numerals 1 – 100 and Number names 1 – 30 (REVISION)

NAME: _____ SEC: _____ DATE: _____

Q1. Write numerals from 59 to 73.



59				
				73

Q2. Write the next four numerals.

a) 7, _____, _____, _____, _____

b) 96, _____, _____, _____, _____

c) 39, _____, _____, _____, _____

d) 15, _____, _____, _____, _____

Q3. Write the number names.

a) 22 – _____

b) 30 – _____

c) 8 – _____

d) 15 – _____

Q4. Write the numerals.

a) Eleven – _____

c) Seventeen – _____

b) Three – _____

d) Twenty – _____

Please file the worksheet

INTERNATIONAL INDIAN SCHOOL, DAMMAM**CLASS – 1****MATHS WORKSHEET NO – 2****Numerals 1 – 100 (Before , After and In Between)**

NAME: _____ SEC: _____ DATE: _____

Q1. Write the number that comes after:

a) 19 – _____

e) 70 – _____

b) 82 – _____

f) 99 – _____

c) 26 – _____

g) 54 – _____

d) 61 – _____

h) 35 – _____

Q2. Write the number that comes in between:

a) 77 _____ 79

e) 64 _____ 66

b) 39 _____ 41

f) 28 _____ 30

c) 10 _____ 12

g) 43 _____ 45

d) 55 _____ 57

h) 97 _____ 99

Q3. Write the number that comes before:

a) _____ 100

e) _____ 87

b) _____ 68

f) _____ 42

c) _____ 23

g) _____ 95

d) _____ 71


h) _____ 34

Please file the worksheet

INTERNATIONAL INDIAN SCHOOL, DAMMAM
STD-1 MATHS WORKSHEET NO. 3

DAYS OF THE WEEK (FOR ORALS)

Name: _____ Sec.: _____ Date: _____



I. Choose the correct answer and fill in the blanks:

1. There are _____ days in a week. {five, seven}
2. _____ is the last day of the week. {Monday, Saturday}
3. Wednesday comes just after _____. {Tuesday, Thursday}
4. We have holidays on _____ and _____. {Friday, Monday, Saturday}
5. _____ is the first day of the week. {Tuesday, Sunday}
6. If today is Thursday, then yesterday was _____. {Friday, Wednesday}

II. Name the following:

1. Which is the third day of the week? _____
2. Which day comes before Sunday? _____
3. Which day comes between Thursday and Saturday? _____
4. Which day do you wear white uniform? _____
5. Which day comes after Tuesday? _____



INTERNATIONAL INDIAN SCHOOL DAMMAM



MATHS WORKSHEET NO - 4



COMPARISON OF NUMBERS CLASS: 1



NAME: _____ **SEC:** _____ **DATE:** _____



Q1. Put the correct symbols (<, >, =) in the given boxes.

a)  



b)  



c)  



d)  



e)  



Q2. Count and write the numerals and put the symbols (<, >, =) in the given boxes.

a)  

b)  

c)  

d)  

e)  

Q3. Fill in the symbols ($>$, $<$ or $=$) and write 'greater than', 'less than' or 'equal to'.

a) 5 10
5 is _____ 10

b) 8 18
8 is _____ 18


c) 36 26
36 is _____ 26

d) 74 47
74 is _____ 47

e) 25 25
25 is _____ 25

Q4. Fill in the correct symbols ($<$, $>$ or $=$).

a)	6	<input type="text"/>	8
b)	34	<input type="text"/>	25
c)	71	<input type="text"/>	17
d)	49	<input type="text"/>	47
e)	80	<input type="text"/>	90
f)	56	<input type="text"/>	45



g)	26	<input type="text"/>	16
h)	78	<input type="text"/>	99
i)	12	<input type="text"/>	8
j)	62	<input type="text"/>	62
k)	36	<input type="text"/>	13
l)	84	<input type="text"/>	37

INTERNATIONAL INDIAN SCHOOL-DAMMAM

MATHS- ADDITION WORKSHEET NO: 5

NAME: _____ CLASS:1 _____ DATE: _____

Q1. Count, draw and add

a)  +  = _____

_____ + _____ = _____

b)  +  = _____

_____ + _____ = _____

c)  + _____ = _____

_____ + _____ = _____

Q2. Draw and add

a) 3 + 4 = _____


_____ + _____ = _____

b) 4 + 0 = _____

_____ + _____ = _____

c) 2 + 1 = _____

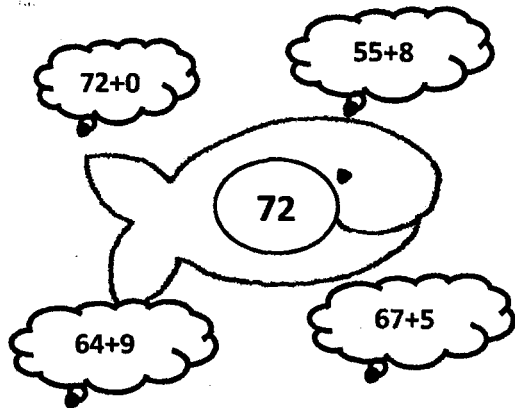
_____ + _____ = _____



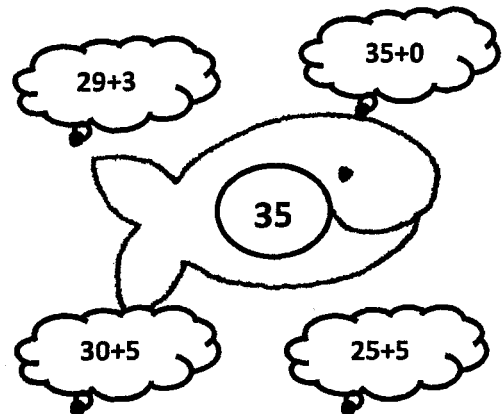
ADDITION MEANS
"PUTTING THINGS
TOGETHER"

Q3. These fishes are trying to catch food. Colour the bubbles that match the number on the fish.

a)



b)



Q4. Complete the vertical addition given below:

9	7	2	6	4	8	3
+ 6	+ 1	+ 5	+ 8	+ 4	+ 0	+ 7

Q5. Rayan wants to meet his friend. Colour the boxes that have 9 as the sum to help him find the way.

START

$1+8=$	$2+7=$	$4+3=$	$6+2=$
$2+4=$	$9+0=$	$6+0=$	$5+1=$
$7+3=$	$5+4=$	$6+3=$	$8+0=$
$3+4=$	$5+0=$	$7+2=$	$8+1=$

STOP

INTERNATIONAL INDIAN SCHOOL, DAMMAM

TERM-1 REVISION WORKSHEET (2018-2019) CLASS-1

MATHEMATICS

Name: _____ Section: _____ Date: _____

Q1. Fill in the missing numerals.

349			
		356	
			362
			368

Q2. Count, draw and add.

a) $\begin{array}{ccc} \text{☺} & \text{☺} & \text{☺} \\ \hline \end{array} + \begin{array}{cc} \text{☺} & \text{☺} \\ \hline \end{array} = \underline{\hspace{4cm}}$

$\begin{array}{ccc} & & \\ \hline \end{array} + \begin{array}{cc} & \\ \hline \end{array} = \underline{\hspace{4cm}}$

b) $\begin{array}{cc} \blacktriangle & \blacktriangle \\ \hline \end{array} + \begin{array}{c} \\ \hline \end{array} = \underline{\hspace{4cm}}$

$\begin{array}{cc} & \\ \hline \end{array} + \begin{array}{c} \\ \hline \end{array} = \underline{\hspace{4cm}}$

c) $\begin{array}{cccc} \bigcirc & \bigcirc & \bigcirc & \bigcirc \\ \hline \end{array} + \begin{array}{cc} \bigcirc & \bigcirc \\ \hline \end{array} = \underline{\hspace{4cm}}$

$\begin{array}{cccc} & & & \\ \hline \end{array} + \begin{array}{cc} & \\ \hline \end{array} = \underline{\hspace{4cm}}$

d) $\begin{array}{cc} \heartsuit & \heartsuit \\ \hline \end{array} + \begin{array}{cc} \heartsuit & \heartsuit \\ \hline \end{array} = \underline{\hspace{4cm}}$

$\begin{array}{cc} & \\ \hline \end{array} + \begin{array}{cc} & \\ \hline \end{array} = \underline{\hspace{4cm}}$

Q3. Draw and add.

a) 0 + 4 = _____

_____ + _____ = _____

b) 2 + 2 = _____

_____ + _____ = _____

c) 5 + 1 = _____

_____ + _____ = _____

Q 4. Add.

a) $46 + 7 =$ _____

f) $80 + 1 =$ _____

b) $11 + 9 =$ _____

g) $44 + 6 =$ _____

c) $21 + 4 =$ _____

h) $5 + 5 =$ _____

d) $72 + 3 =$ _____

i) $9 + 9 =$ _____

e) $30 + 0 =$ _____

j) $65 + 5 =$ _____

Q.5 Write the next four numerals.

a) 109 - _____ , _____ , _____ , _____

b) 298 - _____ , _____ , _____ , _____

c) 360 - _____ , _____ , _____ , _____

d) 97 - _____ , _____ , _____ , _____

e) 322 - _____ , _____ , _____ , _____

Q.6 Write the number names of the following numerals.

a) 50 _____

b) 28 _____

c) 40 _____

d) 13 _____

e) 33 _____

Q.7 Write the numerals of the following number names.

a) Eighteen _____

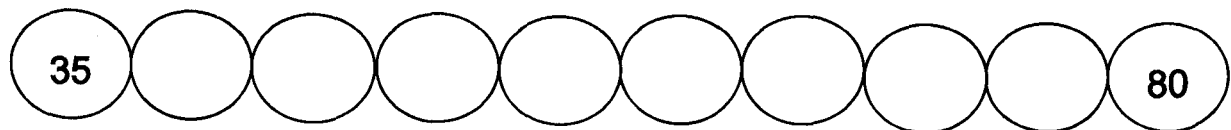
b) Twenty _____

c) Eleven _____

d) Forty seven _____

e) Thirty two _____

Q.8 Count in 5's from 35 to 80.



FOR ORALS

Name the following.

1. How many days are there in a week? Which are they?
2. Which is the first day of the week?
3. Which day comes between Thursday and Saturday?
4. Which ^{do} day you wear white uniform?
5. Which day comes before Saturday?

LEARN THE TABLES OF 2 AND 5.